

Surname	Centre Number	Candidate Number
First name(s)		0



GCSE

3300U60-1



WEDNESDAY, 14 JUNE 2023 – MORNING

**MATHEMATICS
UNIT 2: CALCULATOR-ALLOWED
HIGHER TIER**

1 hour 45 minutes

ADDITIONAL MATERIALS

A calculator will be required for this examination.
A ruler, a protractor and a pair of compasses may be required.

INSTRUCTIONS TO CANDIDATES

Use black ink or black ball-point pen. Do not use gel pen or correction fluid.
You may use a pencil for graphs and diagrams only.
Write your name, centre number and candidate number in the spaces at the top of this page.
Answer **all** the questions in the spaces provided.
If you run out of space, use the additional page at the back of the booklet. Question numbers must be given for all work written on the additional page.
Take π as 3.14 or use the π button on your calculator.

INFORMATION FOR CANDIDATES

You should give details of your method of solution when appropriate.
Unless stated, diagrams are not drawn to scale.
Scale drawing solutions will not be acceptable where you are asked to calculate.
The number of marks is given in brackets at the end of each question or part-question.
In question 10(a), the assessment will take into account the quality of your linguistic and mathematical organisation, communication and accuracy in writing.

For Examiner's use only		
Question	Maximum Mark	Mark Awarded
1.	6	
2.	4	
3.	4	
4.	6	
5.	4	
6.	7	
7.	4	
8.	5	
9.	2	
10.	8	
11.	3	
12.	6	
13.	5	
14.	4	
15.	6	
16.	6	
Total	80	

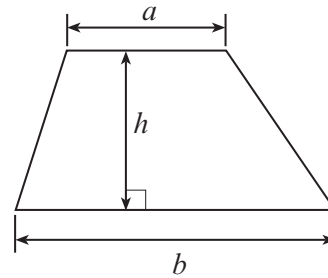
3300U601
01



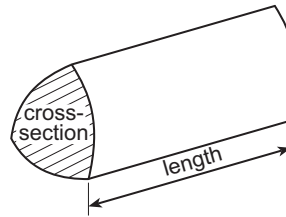
JUN233300U60101

Formula List – Higher Tier

Area of trapezium = $\frac{1}{2}(a + b)h$

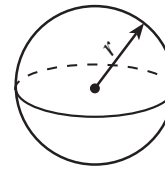


Volume of prism = area of cross-section \times length



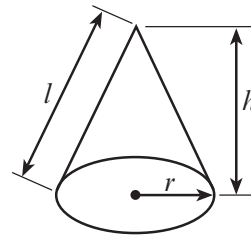
Volume of sphere = $\frac{4}{3}\pi r^3$

Surface area of sphere = $4\pi r^2$



Volume of cone = $\frac{1}{3}\pi r^2 h$

Curved surface area of cone = $\pi r l$

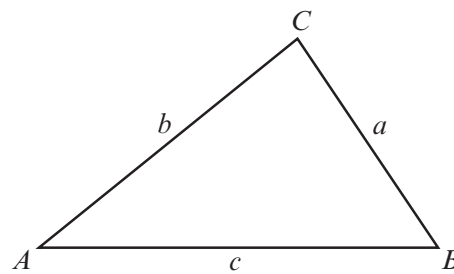


In any triangle ABC

Sine rule $\frac{a}{\sin A} = \frac{b}{\sin B} = \frac{c}{\sin C}$

Cosine rule $a^2 = b^2 + c^2 - 2bc \cos A$

Area of triangle = $\frac{1}{2} ab \sin C$



The Quadratic Equation

The solutions of $ax^2 + bx + c = 0$ where $a \neq 0$ are given by $x = \frac{-b \pm \sqrt{(b^2 - 4ac)}}{2a}$

Annual Equivalent Rate (AER)

AER, as a decimal, is calculated using the formula $\left(1 + \frac{i}{n}\right)^n - 1$, where i is the nominal interest rate per annum as a decimal and n is the number of compounding periods per annum.



1. (a) Solve the equation $7 + 5(x - 2) = 3x + 8$.

[3]

.....

.....

.....

.....

.....

.....

(b) Make f the subject of the formula $h = 13 - 2f$.

[2]

.....

.....

.....

.....

(c) Factorise $15x - 35y$.

[1]

.....

.....



2. A large number of prize tokens are placed in a box.
The tokens are identical in shape and size.

Gold, Silver, Bronze or *No Prize* is written on each token.

One token is chosen at random from the box.

The table below shows the probability of choosing a *Gold* prize token and the probability of choosing a *Silver* prize token.

Token	Gold	Silver	Bronze	No Prize
Probability	0.02	0.18		

- (a) There are three times as many *No Prize* tokens in the box as there are *Bronze* prize tokens.

Complete the table.

[2]

.....

.....

.....

.....

.....

- (b) There are 15 *Gold* prize tokens in the box.
How many *Silver* prize tokens are there in the box?

[2]

.....

.....

.....

.....

.....



4. (a) Evaluate $\frac{\sqrt[3]{154}}{7.9 - 3.26}$.

Give your answer correct to 2 significant figures.

[2]

.....

.....

.....

.....

(b) Calculate the reciprocal of 23.
Give your answer correct to 3 decimal places.

[2]

.....

.....

.....

(c) Circle the correct answer for each of the following.

(i) The Lowest Common Multiple (LCM) of 4 and 6 is:

2 4 6 12 24

[1]

.....

(ii) The Highest Common Factor (HCF) of 10 and 15 is:

5 10 15 30 150

[1]

.....



5. Solve the following simultaneous equations using an algebraic (not graphical) method. You must show all your working. [4]

$$2x + 3y = 16.4$$

$$3x - 2y = 7.7$$

.....

.....

.....

.....

.....

.....

.....

.....

.....

.....

.....

.....

.....

.....

.....

.....

.....

.....

.....

.....

.....

.....

.....

.....

3300U601
07

6. In the diagram below, AD is a straight line.

$$\hat{BAC} = 90^\circ, \hat{BDE} = 90^\circ \text{ and } \hat{CBE} = 90^\circ.$$

$$AC = 7.7 \text{ cm}, BC = 11.3 \text{ cm and } BD = 13.1 \text{ cm}.$$

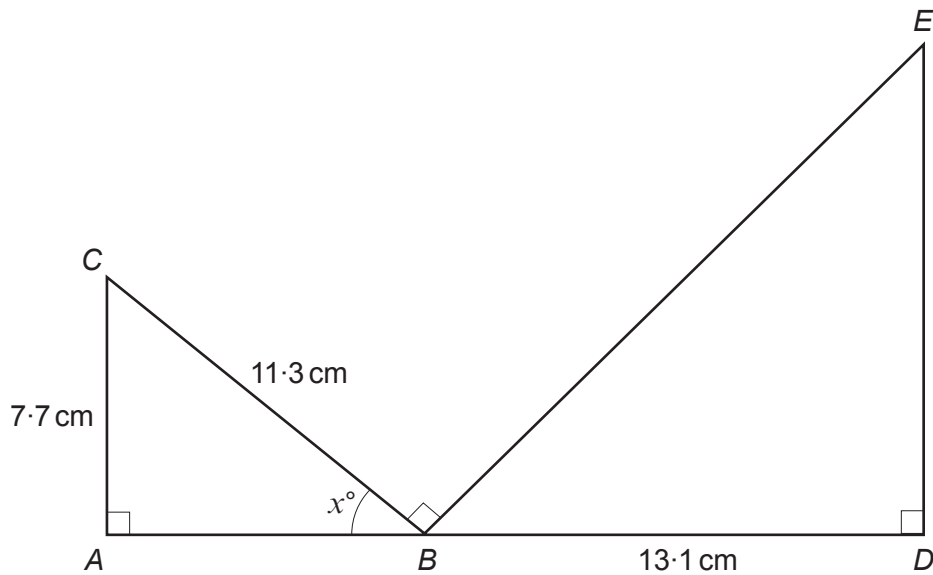


Diagram not drawn to scale

- (a) Calculate the value of x .

[3]

.....

.....

.....

.....

.....

.....

.....

.....

.....

.....

.....

.....

.....



(b) Hence find the length DE .

[4]

.....

.....

.....

.....

.....

.....

.....

.....

.....

.....

.....

7. (a) A number is decreased by 5% of its value.
This is done 4 times in total. Each time, the value decreases by 5%.
Circle the multiplier that you would use to find the value after the 4 decreases.

[1]

- $\times 0.05^4$ $\times 0.95^4$ $\times 0.20$ $\times 1.05^4$ $\times 0.04^5$

(b) A number has been decreased by 17% to give an answer of 3569.
What was the original number?

[3]

.....

.....

.....

.....

.....

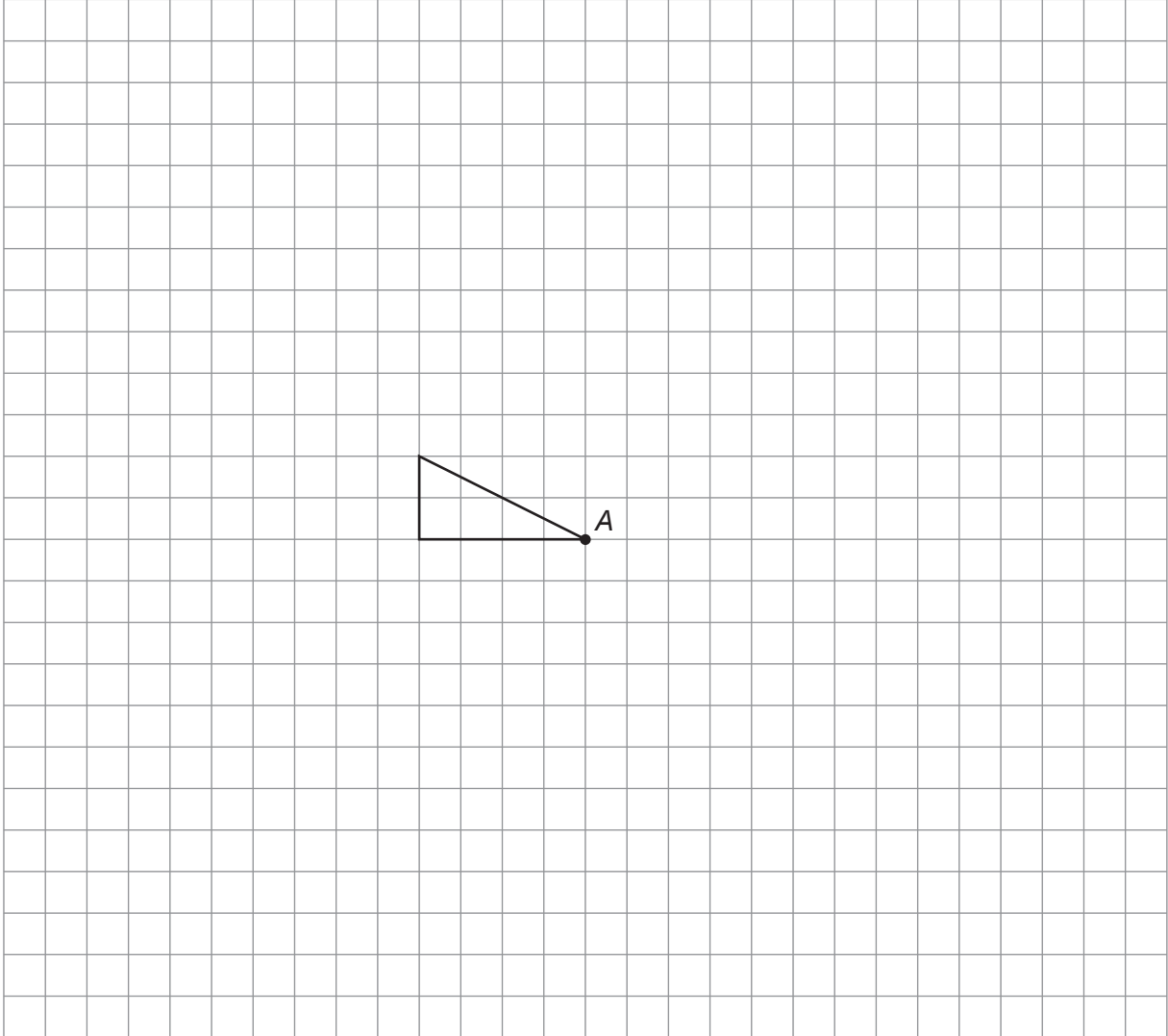
.....

.....

.....



9. Enlarge the given triangle by a scale factor of -2 , using point A as the centre of enlargement. [2]



10. $ABCDE$ is a regular pentagon with sides of length 11 cm.
 CDE is a sector of a circle with centre D and radius 11 cm.
The two shapes are joined together, as shown below.

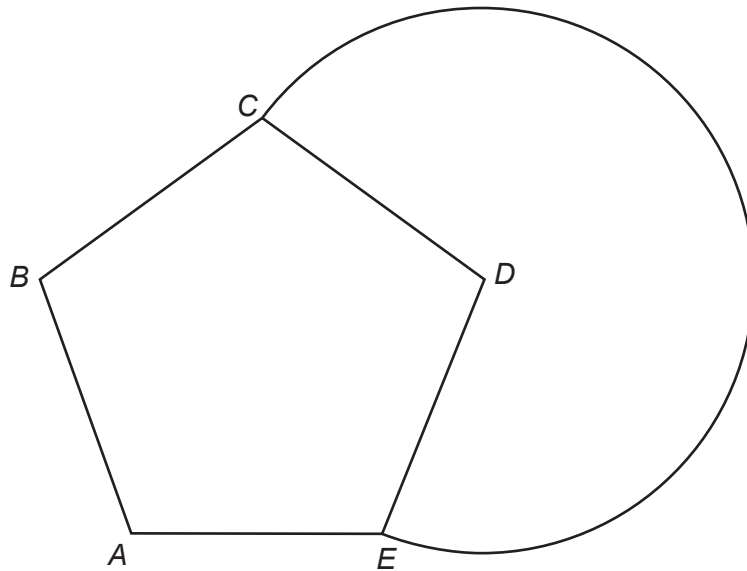


Diagram not drawn to scale

- (a) *In this part of the question, you will be assessed on the quality of your organisation, communication and accuracy in writing.*

Calculate the length of the arc CE shown in the diagram.
You must show all your working.

[4 + 2 OCW]

.....

.....

.....

.....

.....

.....

.....

.....

.....

.....

.....

.....

.....

.....

.....

.....

.....

.....

.....

.....

.....

.....



- (b) In a shape **similar** to the one shown on the previous page, the regular pentagon has sides of length 671 cm.

Complete the following statement.

Total area of new shape = × total area of original shape

You must show all your working.

[2]

.....

.....

.....

.....

.....

.....

.....

11. Make x the subject of the formula $ax^2 + x^2 = b$.

[3]

.....

.....

.....

.....

.....

.....

.....

.....



12. (a) Factorise $8x^2 - 18$.

[3]

.....

.....

.....

.....

.....

.....

.....

.....

.....

.....

.....

.....

.....

.....

.....

.....

.....

.....

.....

.....

.....

.....

.....

(b) Hence solve $8x^2 - 18 = 0$.

[1]

.....

.....

.....

.....

.....

.....

.....

.....

.....

.....

.....

.....

.....

.....

.....

.....

.....

.....

.....

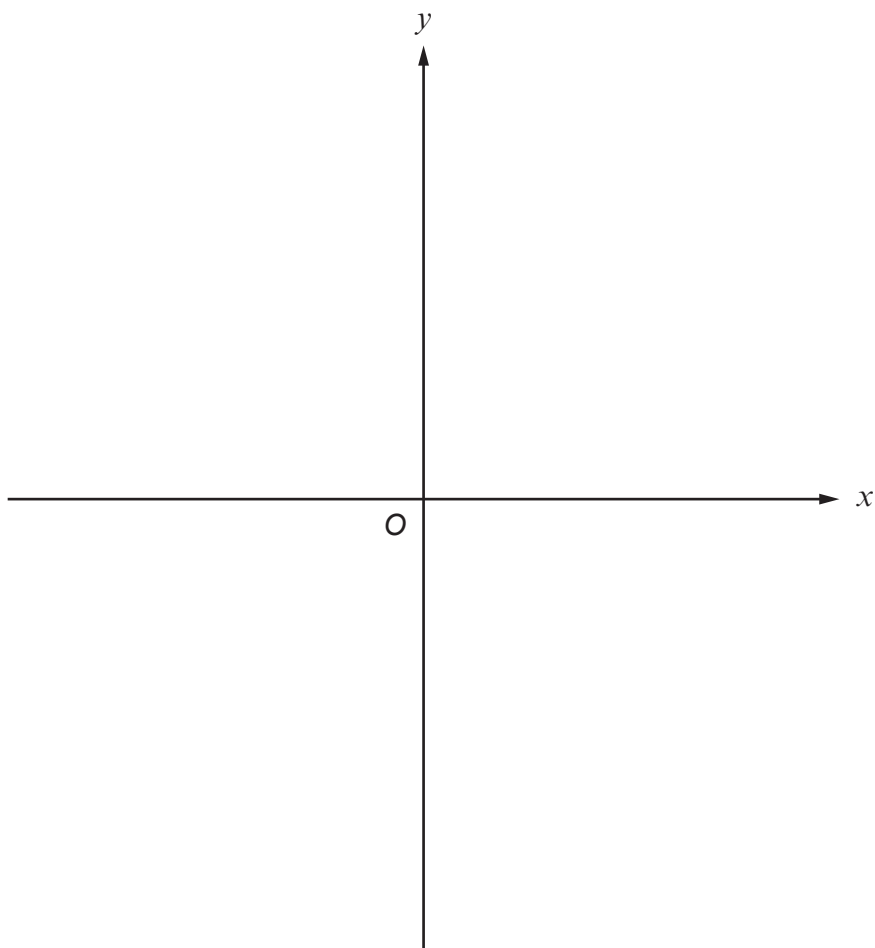
.....

.....

.....



- (c) Hence, sketch the graph of $y = 8x^2 - 18$ on the axes below.
Mark clearly the coordinates of any point where this graph crosses an axis. [2]



Space for working:

.....

.....

.....

.....

.....

.....

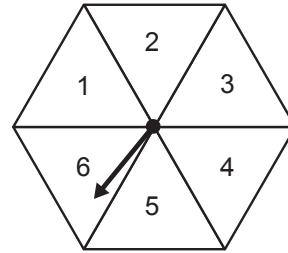
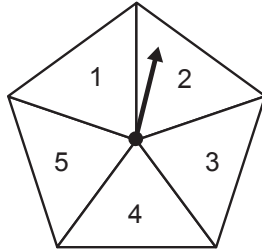
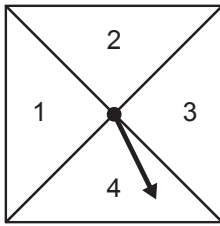
.....

.....

.....



13. Catherine has three spinners, as shown below.



She spins each spinner once.

(a) Calculate the probability that all three spinners land on prime numbers.

[2]

.....

.....

.....

.....

.....

.....

.....

.....

.....

.....

(b) The numbers that the three spinners land on are added together.
Calculate the probability that the total is **greater than 4**.

[3]

.....

.....

.....

.....

.....

.....

.....

.....

.....

.....



14. The cube shown below has a volume of $10\,648\text{ cm}^3$.

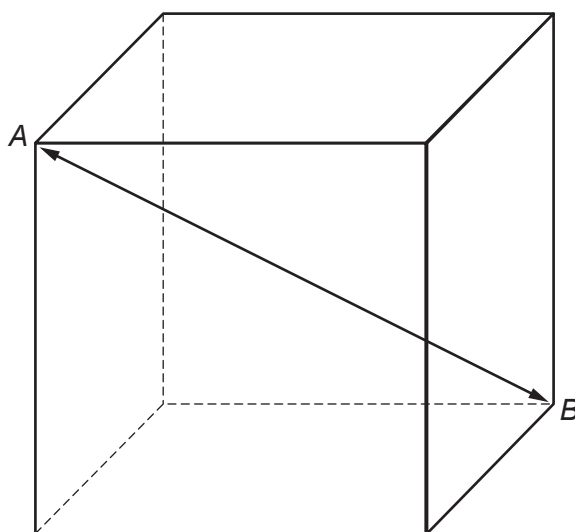


Diagram not drawn to scale

Calculate the length of the internal diagonal AB .

[4]

.....

.....

.....

.....

.....

.....

.....

.....

.....

.....

.....



