

Surname	Centre Number	Candidate Number
First name(s)		0



**GCSE**

3300U50-1



**TUESDAY, 23 MAY 2023 – MORNING**

**MATHEMATICS  
UNIT 1: NON-CALCULATOR  
HIGHER TIER**

1 hour 45 minutes

**ADDITIONAL MATERIALS**

The use of a calculator is not permitted in this examination.  
A ruler, protractor and a pair of compasses may be required.

**INSTRUCTIONS TO CANDIDATES**

Use black ink or black ball-point pen. Do not use gel pen or correction fluid.

You may use a pencil for graphs and diagrams only.

Write your name, centre number and candidate number in the spaces at the top of this page.

Answer **all** the questions in the spaces provided.

If you run out of space, use the additional page at the back of the booklet. Question numbers must be given for all work written on the additional page.

Take  $\pi$  as 3.14.

**INFORMATION FOR CANDIDATES**

You should give details of your method of solution when appropriate.

Unless stated, diagrams are not drawn to scale.

Scale drawing solutions will not be acceptable where you are asked to calculate.

The number of marks is given in brackets at the end of each question or part-question.

In question **5**, the assessment will take into account the quality of your linguistic and mathematical organisation, communication and accuracy in writing.

For Examiner's use only		
Question	Maximum Mark	Mark Awarded
1.	2	
2.	4	
3.	6	
4.	4	
5.	7	
6.	3	
7.	5	
8.	3	
9.	4	
10.	4	
11.	5	
12.	4	
13.	7	
14.	5	
15.	6	
16.	6	
17.	5	
<b>Total</b>	<b>80</b>	

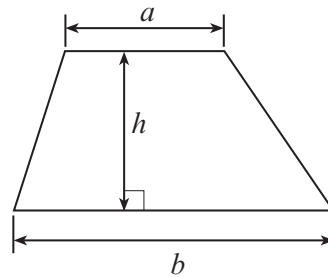
3300U501  
01



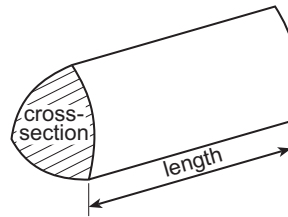
JUN233300U50101

### Formula List – Higher Tier

**Area of trapezium** =  $\frac{1}{2}(a + b)h$

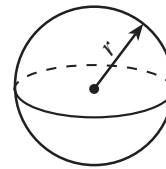


**Volume of prism** = area of cross-section  $\times$  length



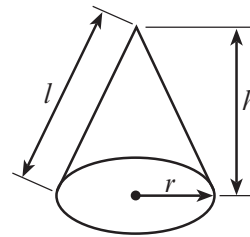
**Volume of sphere** =  $\frac{4}{3}\pi r^3$

**Surface area of sphere** =  $4\pi r^2$



**Volume of cone** =  $\frac{1}{3}\pi r^2 h$

**Curved surface area of cone** =  $\pi r l$

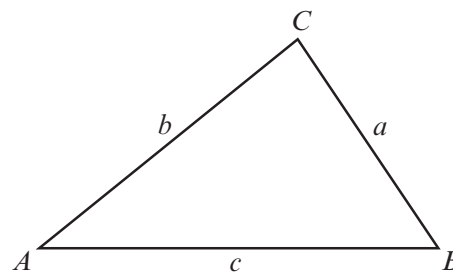


**In any triangle ABC**

**Sine rule**  $\frac{a}{\sin A} = \frac{b}{\sin B} = \frac{c}{\sin C}$

**Cosine rule**  $a^2 = b^2 + c^2 - 2bc \cos A$

**Area of triangle** =  $\frac{1}{2}ab \sin C$



### The Quadratic Equation

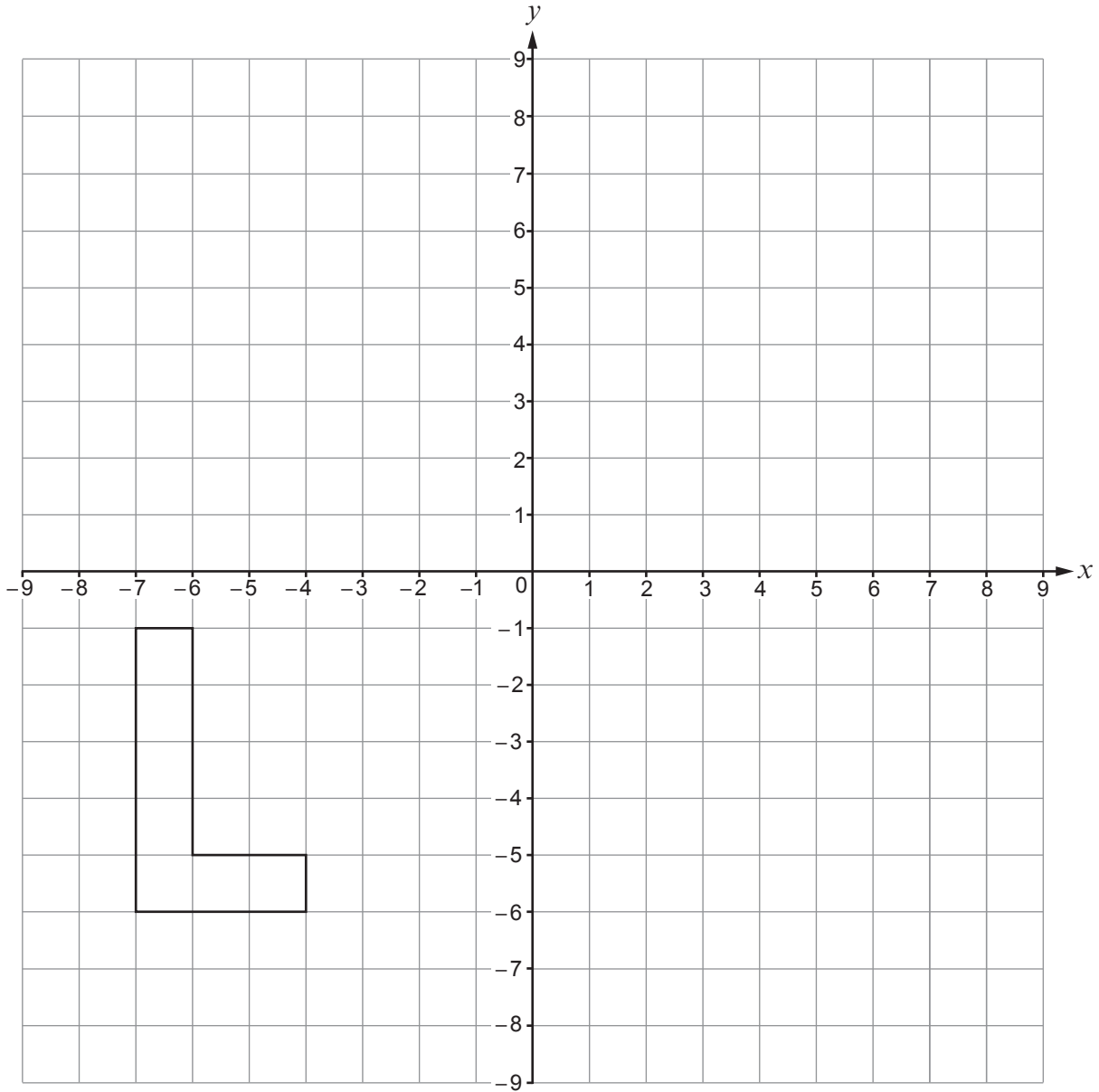
The solutions of  $ax^2 + bx + c = 0$  where  $a \neq 0$  are given by  $x = \frac{-b \pm \sqrt{b^2 - 4ac}}{2a}$

### Annual Equivalent Rate (AER)

AER, as a decimal, is calculated using the formula  $\left(1 + \frac{i}{n}\right)^n - 1$ , where  $i$  is the nominal interest rate per annum as a decimal and  $n$  is the number of compounding periods per annum.



1. (a) Translate the shape shown below using the column vector  $\begin{pmatrix} -1 \\ 7 \end{pmatrix}$ . [1]



- (b) Write down the column vector that will reverse the translation in part (a). [1]

.....



2. (a) Express 675 as a product of its prime factors in index form. [3]

.....

.....

.....

.....

.....

.....

.....

.....

.....

.....

.....

.....

.....

.....

.....

.....

.....

.....

.....

.....

.....

.....

(b) 360 expressed as a product of its prime factors in index form is  $2^3 \times 3^2 \times 5$ .  
What is the smallest whole number that 360 can be multiplied by to give a square number? [1]

.....

.....

.....

Smallest whole number is .....



3. (a) Simplify each of the following.  
Circle your answer in each case.

(i)  $m^4 \times m^3 =$

[1]

$m^7$

$m^{12}$

$m^{43}$

$7m$

$12m$

(ii)  $\frac{m^{15}}{m^5} =$

[1]

$m^{75}$

$\frac{1}{m^3}$

$m^3$

$m^{10}$

$\frac{1}{m^{10}}$

- (b) Write down an expression for the  $n$ th term of the following sequence.

[2]

4,

11,

18,

25,

.....

- (c) List all of the integers that satisfy the following inequality.


[2]

$$13 < 2n < 19$$


Integers are .....



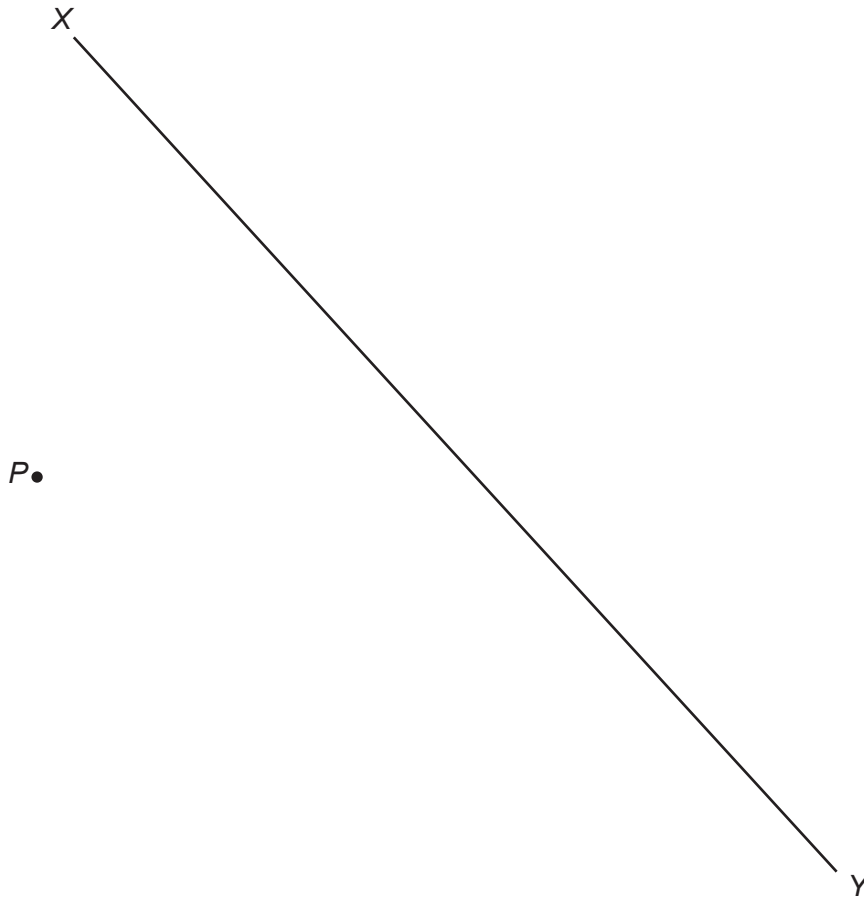
4. (a) Line  $AB$  is shown below.  
Using only a ruler and a pair of compasses, construct an angle of  $60^\circ$  at point  $B$ . [1]



- (b)  $R$  is a point on the line  $LM$ .  
Using only a ruler and a pair of compasses, construct an angle of  $90^\circ$  at point  $R$ . [1]



- (c) Using only a ruler and a pair of compasses, construct a perpendicular line from the point  $P$  to the line  $XY$ . [2]







6. Two time periods are measured as 4 hours 40 minutes and 2 hours 50 minutes.  
Each measurement is correct to the nearest 10 minutes.

What is the least possible sum of these two time periods?  
Give your answer in hours and minutes.

[3]

.....

.....

.....

.....

.....

.....

.....

.....

.....

.....

.....

.....

.....

.....

.....

.....

.....

.....

.....

.....

.....

.....

Answer = ..... hours ..... minutes



7. Whitney walks, cycles or travels on the bus to work each day.

On any randomly chosen day:

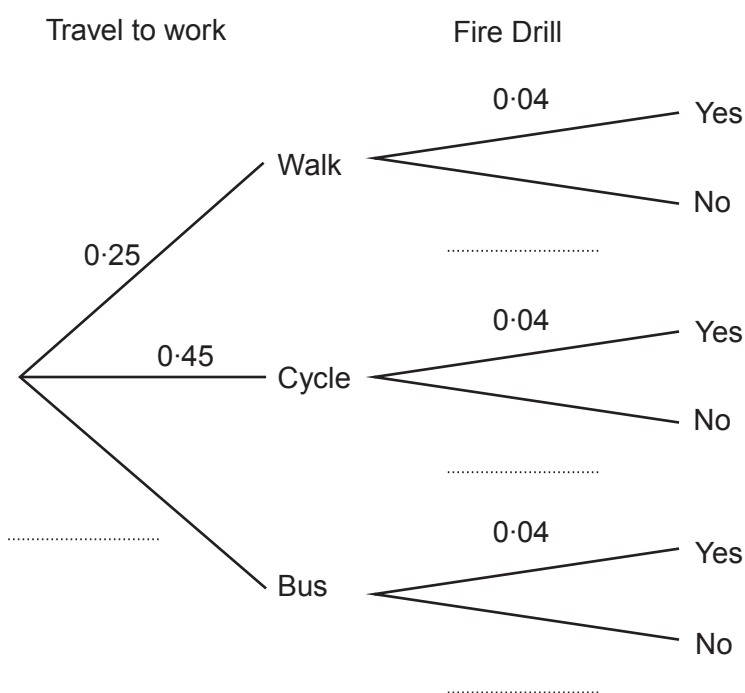
- the probability that she walks to work is 0.25
- the probability that she cycles to work is 0.45.

At work, the probability that there will be a fire drill on any randomly chosen day is 0.04.

How Whitney travels to work is independent of whether or not there is a fire drill.

(a) Complete the tree diagram shown below.

[3]



.....

.....

.....

(b) On a randomly chosen day, what is the probability that Whitney walks to work and there is a fire drill? [2]

.....

.....

.....

.....



8. In the following formulae, each measurement of length is represented by a letter.

Consider the dimensions implied by each formula.

For each case, write down whether the formula could be for a length, an area, a volume or none of these.

The first one has been done for you.

[3]

<u>Formula</u>	<u>Formula could be for</u>
$4d + r - 2w$	length
$w(l + b + h)$	.....
$d^3 + 3 \cdot 14r$	.....
$\frac{w^3}{d^2}$	.....
$3 \cdot 14r^3 - lbh$	.....
$\frac{4w^2}{d}$	.....



9. (a) Express 0.0076 in standard form. [1]

.....

(b) Calculate the value of  $(3 \times 10^{17}) \times (2 \times 10^{-12})$ .  
Give your answer in standard form. [1]

.....

.....

.....

(c) Calculate the value of  $(2.3 \times 10^4) + (5 \times 10^3)$ .  
Give your answer in standard form. [2]

.....

.....

.....

.....

.....





11. (a) Given that  $y$  is inversely proportional to  $x$  and that  $y = 0.2$  when  $x = 160$ , find an expression for  $y$  in terms of  $x$ . [3]

.....

.....

.....

.....

.....

.....

.....

.....

.....

.....

- (b) Use the expression you found in part (a) to complete the following table. [2]

$x$	160	128	
$y$	0.2		0.8

.....

.....

.....

.....

.....

.....

.....

.....

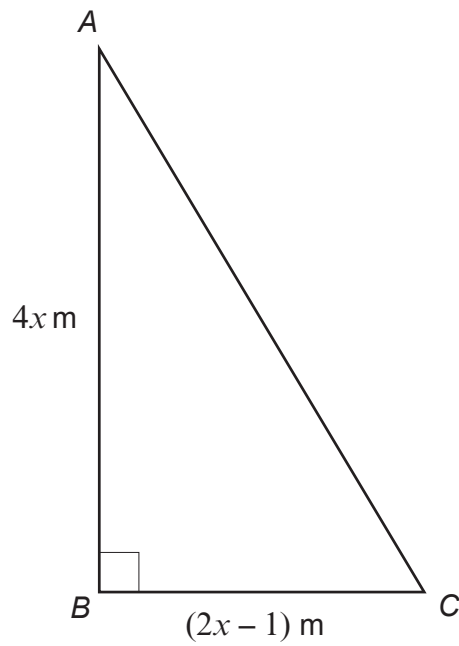
.....

.....





13. Triangle  $ABC$  is right-angled.  
The area of triangle  $ABC$  is  $0.75 \text{ m}^2$ .



*Diagram not drawn to scale*

- (a) Show that  $16x^2 - 8x - 3 = 0$ .

[3]

.....

.....

.....

.....

.....

.....

.....

.....

.....

.....

.....





- (b) (i) Solve the equation  $16x^2 - 8x - 3 = 0$ .  
You must use an algebraic method.

[3]

.....

.....

.....

.....

.....

.....

.....

.....

.....

.....

.....

- (ii) Find the length of  $BC$ .  
You must **justify** any decision that you make.

[1]

.....

.....

.....

.....

.....



14. The table below shows some of the values of  $y = x + \frac{1}{x}$  for values of  $x$  from 0.2 to 4.

$x$	0.2	0.5	0.8	1	2	3	4
$y = x + \frac{1}{x}$	5.2		2.05	2	2.5	3.3	4.25

(a) (i) Complete the table by finding the value of  $y$  for  $x = 0.5$ .

[1]

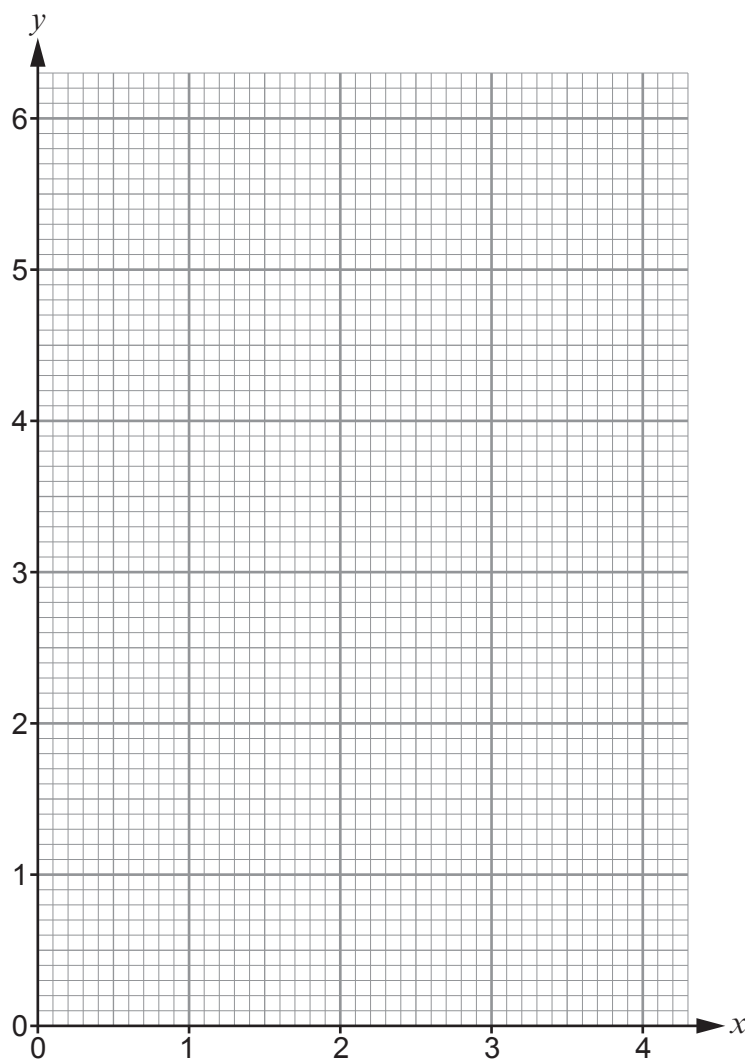
.....

.....

.....

(ii) On the graph paper below, draw the graph of  $y = x + \frac{1}{x}$  for values of  $x$  from 0.2 to 4.

[2]



- (b) Use your graph to solve the equation  $x + \frac{1}{x} = 3$ . [2]

.....

.....

15. A box contains 5 blue discs and 3 yellow discs.  
Three discs are to be chosen at random, without replacement.

- (a) Calculate the probability that the three discs chosen will all be the same colour. [3]

.....

.....

.....

.....

.....

.....

.....

.....

.....

.....

.....

- (b) Calculate the probability that exactly one blue disc is selected. [3]

.....

.....

.....

.....

.....

.....

.....

.....

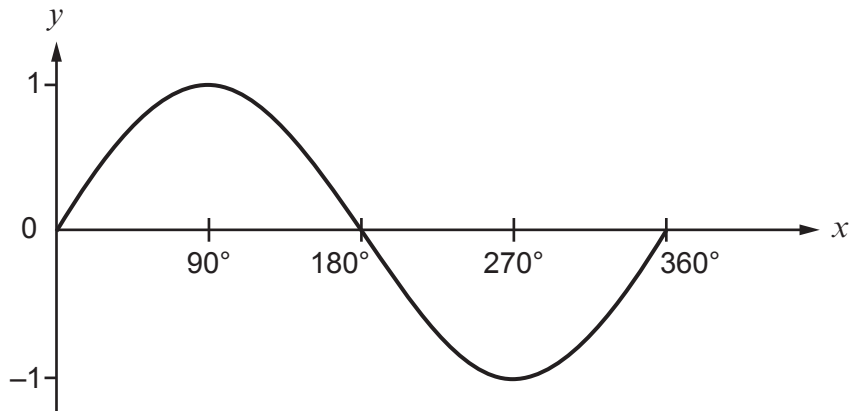
.....

.....

.....



16. The following diagram shows a sketch of  $y = \sin x$  for values of  $x$  from  $0^\circ$  to  $360^\circ$ .



- (a) Given that  $\sin 62^\circ = 0.8829$ , correct to 4 decimal places, write down all the solutions of the equation

$$\sin x = -0.8829$$

for values of  $x$  from  $0^\circ$  to  $360^\circ$ .

[2]

.....

.....

.....

.....

.....

.....

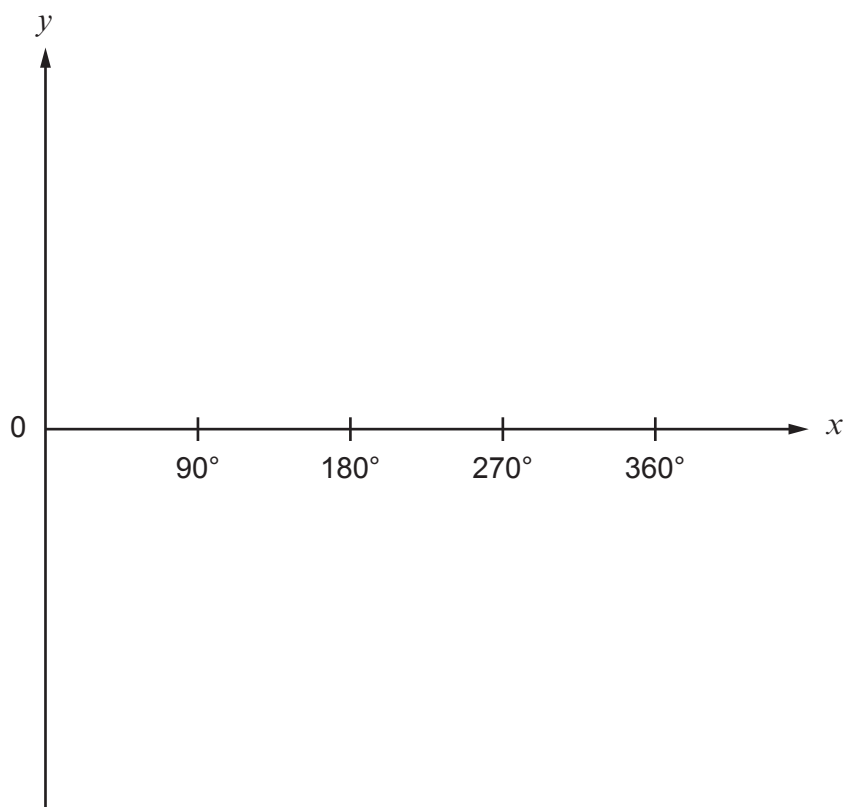
.....

.....

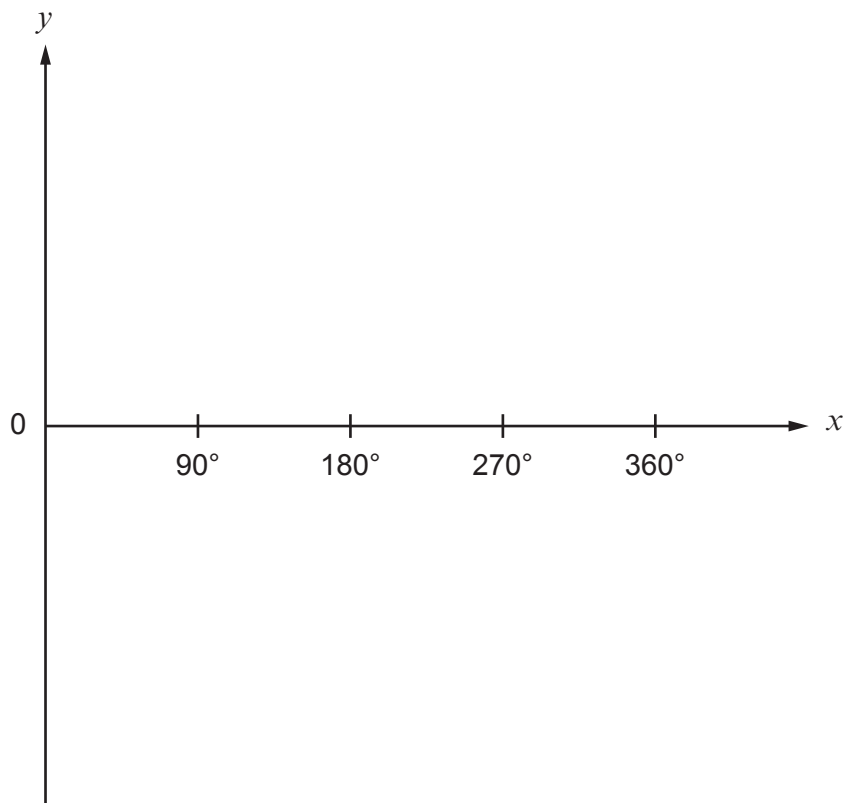
.....



- (b) (i) Use the following axes to sketch the graph of  $y = -\sin x$  for values of  $x$  from  $0^\circ$  to  $360^\circ$ . You must indicate any important values on the  $y$ -axis. [2]



- (ii) Use the following axes to sketch the graph of  $y = \sin x + 1$  for values of  $x$  from  $0^\circ$  to  $360^\circ$ . You must indicate any important values on the  $y$ -axis. [2]



17. (a) Expand and simplify  $(4 - \sqrt{6})(1 + \sqrt{6})$ . [2]

.....

.....

.....

.....

.....

.....

.....

.....

.....

.....

(b) (i) Write down an **integer** value of  $x$  that is greater than 5, for which  $x^{\frac{3}{2}}$  is rational. [1]

.....

.....

$x =$  .....

(ii) Write down an **integer** value of  $x$  that is greater than 5, for which  $x^{\frac{2}{3}}$  is rational. [1]

.....

.....

$x =$  .....

(iii) Write down an **integer** value of  $x$  that is greater than 5, for which  $x^{\frac{3}{2}}$  **and**  $x^{\frac{2}{3}}$  are both rational. [1]

.....

.....

$x =$  .....

**END OF PAPER**





**BLANK PAGE**

**PLEASE DO NOT WRITE  
ON THIS PAGE**

